















In Year 1 we are learning...

Phonics Shed

 c	 g	 i	 u	 e	 ea
 ow	 or	 ey	 ue	 o	 o
 ch	 ch				

Spelling Shed

own	frown	show	brown	snow
down	town	grow	how	blow

spelling bee

hold
path
busy
do
he

TIMES TABLES

We are practicing the **3** times tables.





Run DMC -
It's Like That

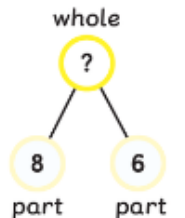
MATHS NO PROBLEM!

Sam bakes 8 chocolate cookies and 6 vanilla cookies.
How many cookies does Sam bake altogether?



How can I use  and  to help me?

Sam bakes  cookies altogether.



We are learning to answer addition and subtraction word problems by using practical resources and different representations.

The most important thing to do at home is to read with your child each day.